

CISD Grade 2 Math Unit 15

Some questions (c) 2012 by CSCOPE.

1 There are 22 students in the classroom. Some students leave for the computer lab. Now there are 7 students in the classroom. How many students left for the computer lab?

- A** 13 students
- B** 15 students
- C** 29 students

2 Ms. Hernandez's class is studying about animals. They wanted to know how fast animals could run. Use the chart to answer the question below.

Animal	Speed
Lion	50 MPH
Chicken	9 MPH
Elephant	25 MPH
Rabbit	35 MPH

How much faster does an elephant run than a chicken?

- F** 16 mph
- G** 19 mph
- H** 34 mph

3 In September, Mark did 37 jumping jacks in P.E. In January, Mark was able to do 10 more jumping jacks than he did in September. How many jumping jacks did Mark do in January?

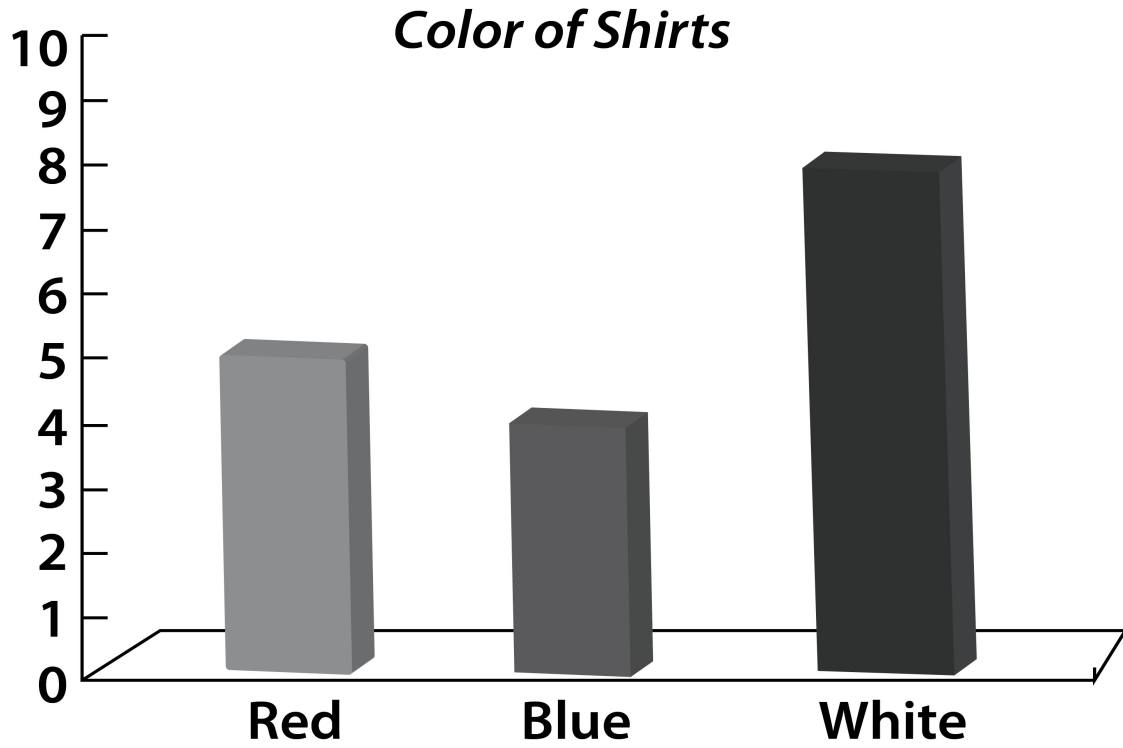


- A** 27 jumping jacks
- B** 47 jumping jacks
- C** 54 jumping jacks

4 Daniel and his family picked apples to sell at a fruit stand. They picked 18 red apples and 25 green apples. How many red and green apples did they pick?

- F** 7 apples
- G** 38 apples
- H** 43 apples




- 5 The bar graph below shows the number of shirt colors in Mrs. Crayon's room. Which shirt color is there the most of?



- A white
- B blue
- C red



Fruit Basket

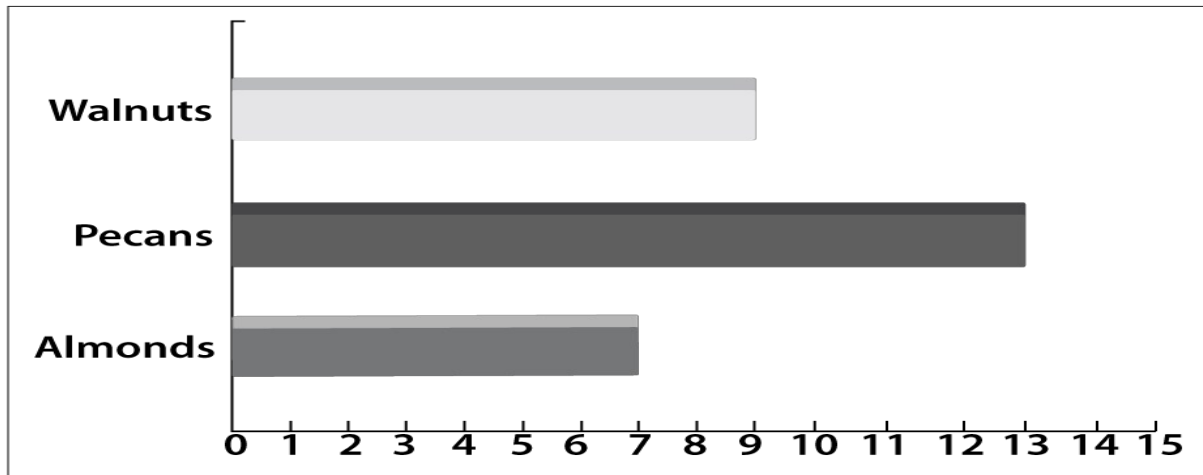
Apples	
Oranges	
Bananas	

Using the picture graph, determine how many more bananas than oranges are in the fruit basket?

- F** 1 banana
- G** 3 bananas
- H** 4 bananas

7 The bar graph reflects the number of nuts in the bowl.

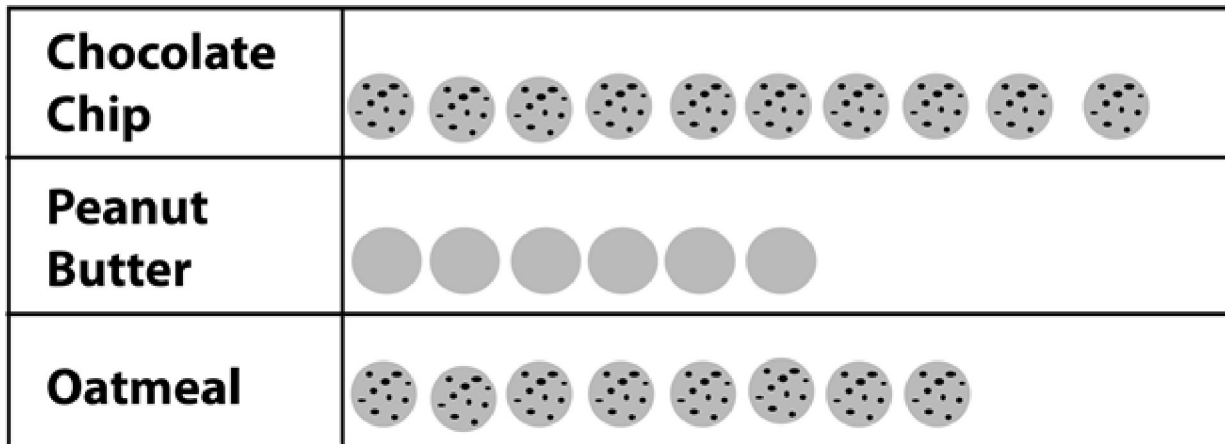
Nuts in a Bowl



Use the bar graph to determine how many more pecans than almonds are in the bowl.

- A** 4 pecans
- B** 6 pecans
- C** 20 pecans

Cookies on a Plate



The picture graph displays the number of cookies on the plate. How many cookies are on the plate?

- F** 14 cookies
- G** 18 cookies
- H** 24 cookies
- 9** The Taylor family loves roller coasters. These four states have the most roller coasters in the United States.

STATE	NUMBER OF ROLLER COASTERS
California	38
Texas	35
Ohio	32
New Jersey	30

How many roller coasters do Texas and California have together?

- A** 63 roller coasters
- B** 73 roller coasters
- C** 3 roller coasters

10 Kennedy Elementary School is having a reading contest. Kelly read 45 pages, and Thomas read 36 pages. How many more pages did Kelly read than Thomas?

Explain how you determined your answer.

--	--